












Dragon Maths



Air dragon 3



Name: _____

Addition	Counting: What's next?	Write the answer	Write in order, smallest to greatest
5 + _____ = 10	5,4,3, _____, _____	2 more than 13 =	9,21,19
8 + _____ = 10	7,8,9, _____, _____	2 less than 5 =	26,27,23
9 + _____ = 10	36,35,34, _____, _____	2 more than 3 =	2,8,5
 +  =	23,24,25, _____, _____	2 more than 8 =	35,39,38
 +  =	55,54,53, _____, _____	2 less than 4 =	18,15,19
 +  +  =	82,81, 80, _____, _____	2 less than 2 =	11,18,12
10 + _____ = 10	97,98, 99, _____, _____	2 more than 17 =	8,9,6
 +  =	43,42,41 _____, _____	2 less than 11 =	3,2,1
4 + _____ = 10	19,20,21, _____, _____	2 more than 6 =	10,6,8
 +  =	14,13,12, _____, _____	2 more than 18 =	42,48,44